



**1<sup>st</sup> TERM 2023 Holiday-Package**  
**ENGLISH P.5**

Time allowed: 2 hours 15 minutes

Name: \_\_\_\_\_ Stream \_\_\_\_\_

**SECTION A**

**In questions 1-5, fill in the blank space with the most suitable word.**

1. This is the girl \_\_\_\_\_ parcel was delivered yesterday.
2. When the car broke down, the driver took it to Mr. Musoke's garage for \_\_\_\_\_.
3. Neither John \_\_\_\_\_ Kalule can write well.
4. \_\_\_\_\_ does your shirt look like?
5. Most school pupils in Uganda go to school \_\_\_\_\_ foot.

**For questions 6-15, fill in blank space with the correct form of the word in brackets.**

6. We wrote \_\_\_\_\_ letters when we broke the window pane. (apologize)
7. Some of \_\_\_\_\_ have not crossed the road on our own. (we)
8. I fastened my seatbelt by \_\_\_\_\_ (self)
9. We revised our books, we \_\_\_\_\_ pass the exams. (will)
10. My sister has \_\_\_\_\_ the new letter very well. (read)
11. He gave a clear \_\_\_\_\_ about the internet. (explain)
12. What is Okocha's \_\_\_\_\_? (nation)
13. Emma and Eric took \_\_\_\_\_ vehicle to the garage for repair (they)
14. The visitor came with a lot of \_\_\_\_\_. (luggage)
15. Joan lost her cell phone because she was not \_\_\_\_\_ (care)

**In questions 16-17, arrange the given words in alphabetical order.**

16. vehicle travel radio letter  
\_\_\_\_\_

17. seal set send sell  
\_\_\_\_\_

**For questions 18 and 19, write the short forms of the following.**

18. e-mail \_\_\_\_\_
19. P.O. \_\_\_\_\_ Box

**In questions 20 and 22, rewrite giving the opposite of the underlined words.**

20. It is harmful to drive a car with brakes.

21. I met him at the entrance.

22. My sister is an obedient girl.

**For questions 23 to 25, rewrite the sentence giving the plural form of the underlined words.**

23. Media houses published a piece of information.

24. The lorry is being towed by the breakdown.

25. The farmer sold a goose to his neighbour.

**In questions 26 to 27, use each of the words in sentences to show that you understand the difference in meaning.**

26. peace\_\_\_\_\_

27. piece\_\_\_\_\_

**For questions 28-30, give a single word for the underlined group of words.**

28. The man who collects fare in a bus is well disciplined.

29. He draw funny pictures that amuse people.

30. A book containing lists of telephone numbers and addresses is very useful.

## **SUB-SECTION II**

**In questions 31-50, rewrite the sentences as instructed in the brackets without changing the meaning.**

31. The car is very old. It cannot be sold. (Rewrite using:.....so.....that.....)

---

---

32. The mechanic uses a spanner each time he wants to fix the bolts on the wheel.  
(Rewrite beginning: Whenever.....)

---

---

33. All the pupils in our class have not visited a garage . (Rewrite beginning: None.....)

---

---

34. There were some books in the library. (Rewrite using:.....any.....)

---

---

35. If he gets money, he will buy a car. (Rewrite beginning: Unless.....)

---

---

36. Immediately the president arrived, it started raining. (Rewrite beginning: As soon as.....)

---

---

37. She went to the internet café. She wanted to download some games. (Rewrite using.....so as.....)

---

---

38. He saved some money. He wanted to buy a laptop. (Rewrite using....in order....)

---

---

39. Paul likes traveling by bus to traveling by taxi. (Rewrite using .....prefer.....)

---

---

40. You should own a battery charger. (Rewrite using.....need to.....)

---

---

41. We are likely to visit the post office. (Use....might.....)

---

---

42. It is bad to drive a dirty car. (Rewrite beginning: You mustn't .....)

---

---

43. It was very early. We couldn't go to the beach. (Rewrite using:.....too....to.....)

---

---

44. As we were walking, we saw a speeding lorry. (Rewrite using.....while.....)

---

---

45. Ali speaks Arabic. He comes from Saudi Arabia. (Rewrite using.....because.....)

---

---

46. David took the computer. (Rewrite ending:.....by David)

---

---

47. We met the girl. Her mother had travelled to Mombasa. (Rewrite using:.....whose...)

---

---

48. Oumba is a mechanic. Dalia is a mechanic. (Rewrite beginning: Either.....)

---

---

49. go and bring an envelope he said. (Punctuate correctly)

---

---

50. A word to a wise.....(Complete correctly)

---

---

## **SECTION B**

51. **Read the passage below and in full sentences answer the questions about it.**  
Media are the different means used to communicate to millions of people. They spread information, news and entertainment to many people. That is why they are called mass media. Print media are newspaper, magazines, brochures and newsletters.

Newspapers are the most popular. They are made of sheets of paper printed on both sides. Newspapers contain news, opinions, entertainment cartoons and advertisements. In Uganda, there are daily newspapers which are usually sold very early in the morning. Newspapers report about what happens in the country and the rest of the world.

How is a newspaper produced? Journalists get the stories from people. They talk to them face to face or on telephone. They write stories with the help of computers. The stories are proof read by editors to make sure that there is correct reporting. The newspapers are printed, arranged, folded and packed. They are now ready for sale.

### **Questions**

- a) What is the passage about?

---

---

- b) Who collects news for newspapers?

---

---

- c) How are stories got from people?

---

---

- d) Who edits the news?

---

---

- e) Why is the news proof read?

\_\_\_\_\_

\_\_\_\_\_

–

f) Name the two things found in newspapers.

i) \_\_\_\_\_

ii) \_\_\_\_\_

g) Give a word or a group of words to mean the same as the following words as used in the passage.

i) \_\_\_\_\_ daily

ii) usually \_\_\_\_\_

h) Suggest a suitable title to the passage.

\_\_\_\_\_

52. Survey was carried out in December 2017 showing some international languages spoken by the residents of a Division (an area in which a Municipality is divided) Study the table down carefully and in full sentences answer the questions about it.

Resident's name	International language spoken				
	English	Spanish	German	French	Italia
Moses	✓			✓	✓
Eva	✓	✓			
Sarah	✓				
Abdul	✓		✓		
Christine	✓				
Andrew	✓	✓	✓	✓	

### Questions

a) When was the survey carried out?

\_\_\_\_\_

\_\_\_\_\_

–

b) What did the survey show?

\_\_\_\_\_

\_\_\_\_\_

–

c) What is a Division?

---

---

d) How many international languages are shown on the table?

---

---

e) Who spoke only one language?

---

---

f) Which language is spoken by all the residents?

---

---

g) Who spoke most languages?

---

---

h) How many residents spoke Spanish?

---

---

i) Apart from Andrew, who else spoke French?

---

---

j) Write down any two ladies who participated in the survey.

i)

---

ii)

---

53. **Richard Muwonge, a primary five pupils met a visitor at the school gate one day. What the visitor said is given above. Write in full sentences, what you think Richard Muwonge said.**

Visitor: Good afternoon, young man.

**Richard:**

---

Visitor: What is your name?

**Richard:**

---

Visitor: In which class are you?

**Richard:**

---

Visitor: Who is your class teacher?

**Richard:**

---

Visitor: Mr. Rusiima? What does he teach?

**Richard:**

---

Visitor: Has he taught adjectives?

**Richard:**

---

Visitor: Oh, ! I thought he had. I was going to ask you a question.  
Is Mr. Barigye, the head teacher around?

**Richard:**

---

Visitor: Where has he gone?

**Richard:**

---

Visitor: Does he have a patient in the hospital?

**Richard:**

---

Visitor: Who is the patient?

**Richard:**

---

54. **Choose the words from the table below to full the blanks correctly.**

hope	beach	interesting	Kampala	given
best	revising	well	48	Johnny

Kiti Primary School,  
P.O.Box \_\_\_\_\_,  
Kako  
23<sup>rd</sup> July, 2018

Dear Rhita,

I \_\_\_\_\_ you are doing \_\_\_\_\_ at your new school. I am also \_\_\_\_\_ hard for the end of term examinations. At our school, the \_\_\_\_\_ performers are always given prizes and



\_\_\_\_\_ outings to the \_\_\_\_\_, the airport and other interesting places around \_\_\_\_\_. I wish you were here to enjoy \_\_\_\_\_ things.

Your friend.

55. **The following sentences are in a wrong order. Re-arrange them correctly to form a good story on information.**

- a. Some little service fee before they give you a computer to use.
- b. If you want to get some international information via the internet,
- c. Sending and receiving information.
- d. This service fee will depend on the time you take surfing.
- e. If it is not connected then you have to
- f. This is because of the new advanced information technology.
- g. The internet café operators will charge you
- h. is very easy in the world today.
- i. Your computer must be connected to this internet.
- j. visit an internet café around town

a) \_\_\_\_\_

\_\_\_\_\_

—

b) \_\_\_\_\_

\_\_\_\_\_

—

c) \_\_\_\_\_

\_\_\_\_\_

—

d) \_\_\_\_\_

\_\_\_\_\_

—

e) \_\_\_\_\_

\_\_\_\_\_

\_\_\_\_\_

f) \_\_\_\_\_  
\_\_\_\_\_  
—

g) \_\_\_\_\_  
\_\_\_\_\_  
—

h) \_\_\_\_\_  
\_\_\_\_\_  
—

i) \_\_\_\_\_  
\_\_\_\_\_  
—

j) \_\_\_\_\_  
\_\_\_\_\_  
\_\_\_\_\_



1<sup>st</sup> TERM 2023 Holiday-Package

**P.5 MATHEMATICS**

**Time allowed: 2hours 30minutes**

Name: ..... Stream:.....

**SECTION A (40 MARKS)**

1. Work out:  $32 \times 3 =$

2. Write XLIV in Hindu Arabic numerals.

3. What is the time shown on the clock face below?



4. If set

$$B = \{ \text{odd numbers between 1 and 11} \}$$

Find  $n(B)$

5. Find the missing number in the sequence.  
1, 2, 4, 8, 16, \_\_\_\_\_, \_\_\_\_\_

6. Write 5,642 in words.

7. Simplify:  $3n + 2n + 5n$

8. List all the factors of 12.

9. Solve:


$$\square - 12 = 13$$

10. What is the average of 7,9,0,8, and 6?

11. Change  $3\frac{1}{3}$  to improper fraction.

12. Name the shape below.



13. If  = 4 trees, what will

 Represent?

14. A pair of canvas shoes costs 4,000/=. What will be the cost of three pairs?

15. Change 4 metres to centimeters.

16. Write 0.3 in words.

17. Add:  $\frac{4}{5} - \frac{1}{5}$

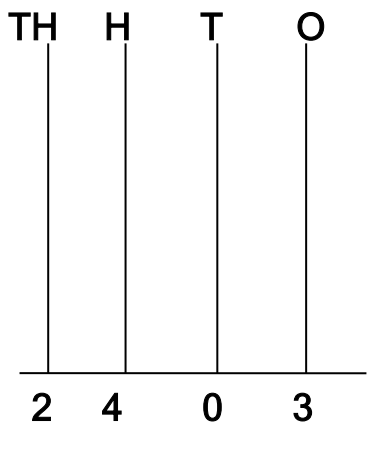
18. Find the L.C.M of 6 and 8.

19. Set  $A = \{a, b, c, d\}$

$B = \{1, 2, 3, 4, 5\}$

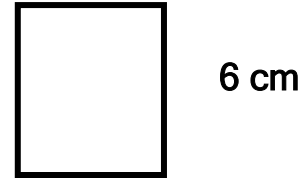
What type of set is shown above?

20. Complete the abacus below.



## SECTION B

21. Study the figure below and answer the questions that follow.

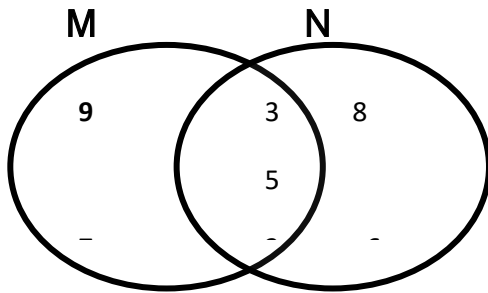


a) Work out the perimeter of the figure above. (2 marks)

b) What name is given to the figure above? (1 mark)

c) Calculate the area of the figure above. (2 marks)

22.



Find i)  $n(M)$  (1 mark)

ii)  $n(N)$  (1 mark)

iii)  $n(M \cap N)$  (1 mark)

iv)  $n(M \cup N)$  (2 marks)

23. Brenda went shopping and

brought the following;

-2kg of sugar for sh. 6000

- 1 bar of soap for sh. 3000

-1 tin of cow boy at sh. 4000

a) Find the total cost of soap and cowboy.

(2marks)

b) How much will one pay for 3 tins of cow boy? (2 marks)

c) Find the total of sugar and soap. (2 marks)

24. Use  $>$ ,  $<$  or  $=$  to complete the mathematical statements below.

a)  $2 \times 3 + 4 \underline{\hspace{1cm}} 3 \times 2 - 4$   
(2 marks)

b) Mode (1 mark)

b)  $XIX \underline{\hspace{1cm}} X + 1$   
(2 marks)

c) Average (2 marks)

c)  $6 \div 2 \underline{\hspace{1cm}} 3 \times 2$   
(1 mark)

25a) 
$$\begin{array}{r} 777,404 \\ \underline{11937} \\ \hline \end{array}$$
  
(2 marks)

27a) What is the place value of 3 in 6349?  
(2 marks)

b) 
$$\begin{array}{r} 483674 \\ \underline{193814} \\ \hline \end{array}$$
  
(2 marks)

c) 
$$\begin{array}{r} 31 \\ \underline{12} \\ \hline \end{array}$$

b) Find the value of 4 in the figure above.  
(2 marks)

d) 
$$\begin{array}{r} 81208 \\ \underline{\hspace{1cm}} \\ \hline \end{array}$$
  
(2 marks)

c) Round off to the nearest hundreds.  
362 (2 marks)

26. Given 3, 6, 5 and 6.  
Find;  
a) Range (1 mark)

Name the figure above.  
(1 mark)

28a) Find 3 fractions equivalent to  $\frac{1}{2}$ .  
(2 marks)

b) How many face does it have?  
(1 mark)

b) A man had  $\frac{7}{8}$  of a cake. He ate  $\frac{3}{8}$  of it. What fraction did she remain with?  
(2 marks)

c) How many vertices does it have?  
(1 mark)

d) How many edges does it have?  
(1 mark)

c) What is  $\frac{2}{5}$  of 20 mangoes?

30. Give any three numbers that can be formed by 4, 7, 5.

a) Write the biggest number using the digits above.  
(1 mark)

29.





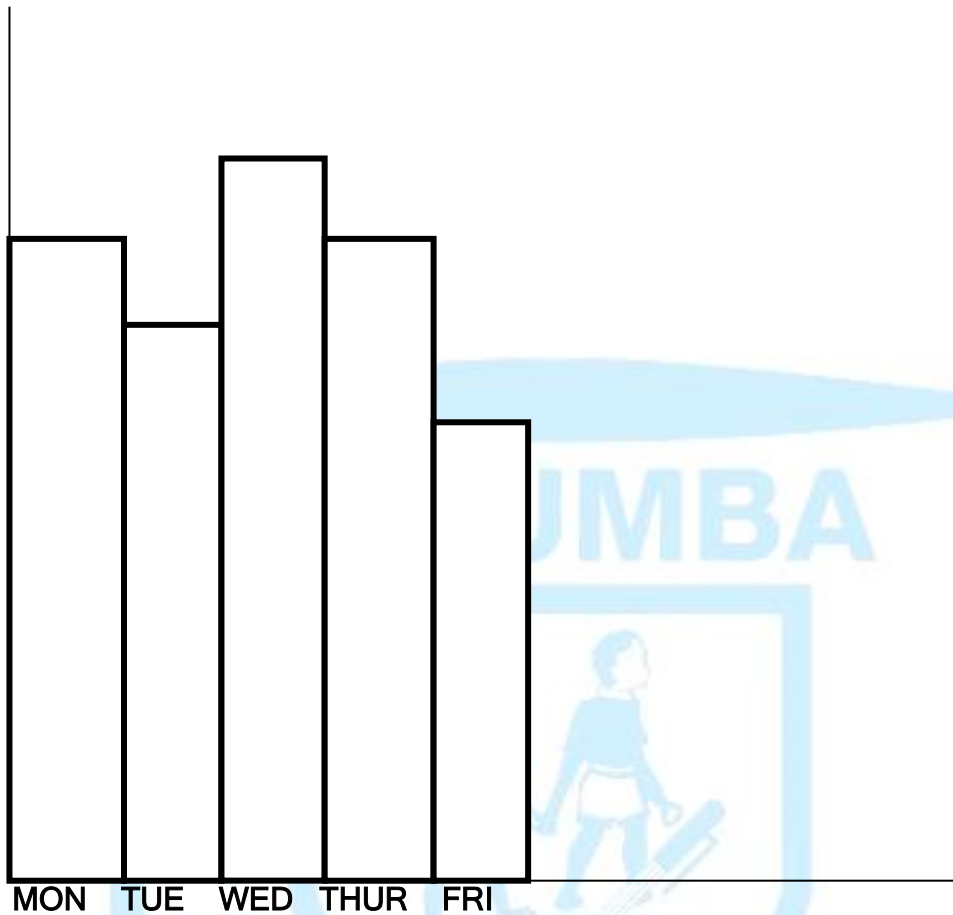
**b) What is the sum of the biggest and smallest?**  
(2 marks)

**b) Find the total age of John and Sarah.**  
(2 marks)

**c) What is the difference between the biggest and smallest number?**  
(2 marks)

**31. Sarah is 15years old. John is 2 years younger than Sarah. How old is Sarah?**  
(2 marks)

32. The graph below shows the attendance of pupils in P.5 in a week.



- a) How many pupils were present on Friday? (1 mark)
- b) On which day did all pupils come to school? (1 mark)
- c) Calculate the total attendance for the week? (2 marks)

END



**1<sup>st</sup> Term 2023 Holiday-Package**

**P.5 INTEGRATED SCIENCE**

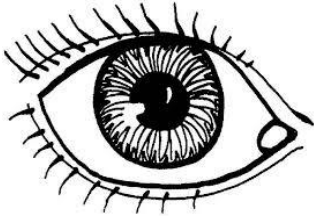
**DURATION: 2 ¼ HOURS.**

**NAME:** \_\_\_\_\_ **STREAM:** \_\_\_\_\_

**SECTION A**

1. **On which part of an insect are legs attached?**  
\_\_\_\_\_
2. **How useful are ventilators on a house?**  
\_\_\_\_\_
3. **Identify any one condition needed by green plants to make starch.**  
\_\_\_\_\_
4. **Why are people encouraged to boil drinking water?**  
\_\_\_\_\_
5. **Identify any one breed of rabbits.**  
\_\_\_\_\_
6. **Why do plants with weak stems climb others?**  
\_\_\_\_\_
7. **Give one way how plants reduce the rate of transpiration.**  
\_\_\_\_\_
8. **Why can't photosynthesis take place at night?**  
\_\_\_\_\_
9. **How do farmers improve on the local breeds of chicken?**  
\_\_\_\_\_
10. **How are floods dangerous to people?**  
\_\_\_\_\_
11. **Why are petals of some flowers brightly coloured?**  
\_\_\_\_\_

The diagram below shows a human body organ.



12. How do we care for the above organ?

---

13. Write down the vector that can spread sleeping sickness among people.

---

14. Why is a box grouped under non-living things?

---

15. Give the difference between a burn and a scald.

---

---

16. Apart from food, mention one other basic need of people.

---

17. In the space provided below, draw and name the garden tool for watering crops.

---

18. Which part of air supports burning?

---

19. How do hook worms enter our bodies?

---

20. Why do we iron our clothes?

---

21. Why do eggs sometimes fail to hatch into chicks after the incubation period?

---

22. Give one sign of measles in children.

---

23. Name any one deficiency disease that affects the eyes.

---

24. **Name any one example of a cereal crop grown in Uganda.**

---

25. **Give any one childhood immunisable disease.**

---

26. **How are female anopheles mosquitoes harmful to people.**

---

27. **Which gas is given out during photosynthesis?**

---

28. **Write down any one example of the exotic breed of chicken.**

---

29. **What is soil profile?**

---

---

30. **What is matter?**

---

---

31. **Identify any one machine used to measure mass and weight.**

---

32. **Calculate the weight of the baby in Newton who is 3 kg.**

---

33. **How is mass different from weight?**

---

---

34. **Why is a hen referred to as poultry?**

---

35. **Give any one difference between a cock and a hen.**

---

---

36. **Why is crop rotation a good farming practice to farmers?**

---

37. Which type of chicken is kept for both egg and meat production?

---

38. Who is a casualty?

---

---

39. Apart from the milk teeth, state another set of teeth in people.

---

40. Which mineral will help birds to lay eggs with hard egg shells?

---

## **SECTION B**

41. (a) Besides proteins write any other two food values.

(i) \_\_\_\_\_

(ii) \_\_\_\_\_

(b) Why is it good for a person to feed on a balanced diet?

---

(c) How can one prevent constipation?

---

42. A child had severe diarrhoea and vomiting.

(a) What advice can you give to the parents of this child?

---

(b) What danger is this child going to face.

---

(c) Write any two ways how diarrhoea is spread.

(i) \_\_\_\_\_

(ii) \_\_\_\_\_

43. Mention any three systems used in poultry keeping.

i) \_\_\_\_\_

ii) \_\_\_\_\_

iii) \_\_\_\_\_

b) Mention the system commonly practiced by rural farmers.

---

44. (a) What are poultry vices?

---

(b) Give any two examples of poultry vices.

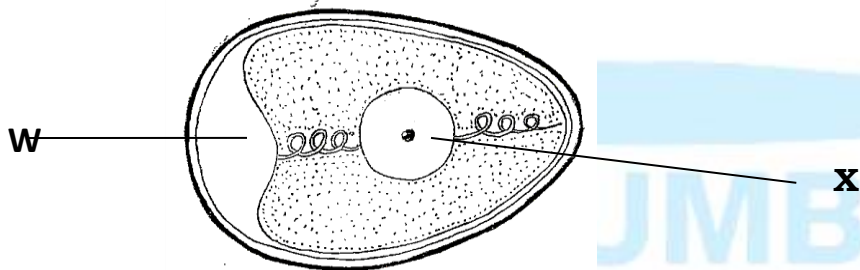
(i) \_\_\_\_\_

(ii) \_\_\_\_\_

(c) How can farmers control poultry vices?

\_\_\_\_\_

45. The diagram below shows an egg. Use it to answer the questions that follow.



(a) Name the parts marked W and X.

(i) W \_\_\_\_\_

(ii) X \_\_\_\_\_

b) Use an arrow to show and name the egg shell.

46. Give any three types of bees in a hive.

i) \_\_\_\_\_

ii) \_\_\_\_\_

iii) \_\_\_\_\_

47. Write one sentence to show the meaning of the term germination.

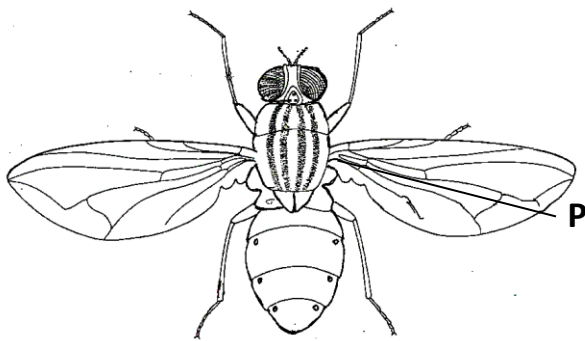
\_\_\_\_\_

b) Mention the three conditions needed for seed germination.

i) \_\_\_\_\_ ii) \_\_\_\_\_

iii) \_\_\_\_\_

48. The diagram below shows an insect. Use it to answer the questions below.



**(a) Why is the above organism not friendly to man?**

**(b) State any one reason why the above organism is grouped under insects.**

**(c) By use of arrows indicate and name the following parts.**

**(i) thorax**

**(ii) abdomen**

**49. (a) Apart from rivers and lakes, name any two sources of water common in our community.**

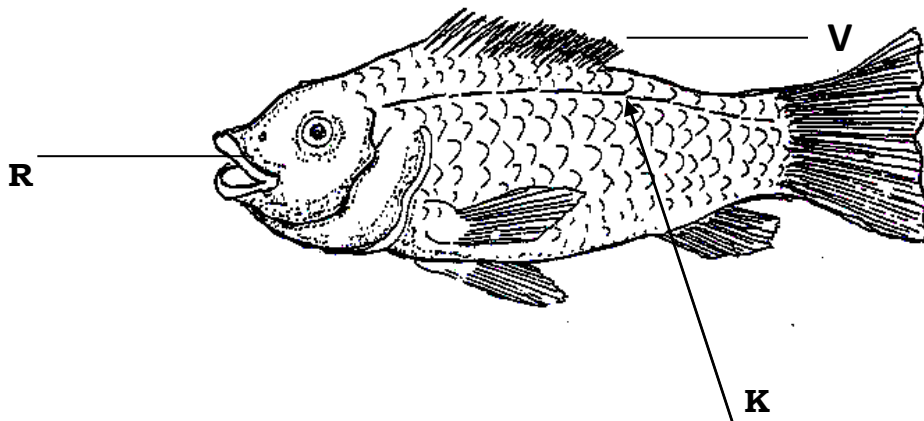
**(i)** \_\_\_\_\_

**(ii)** \_\_\_\_\_

**(b) Identify any one way water can get contaminated.**

**(c) How can water from a lake be made safe for drinking?**

**50. The diagram below shows a fish. Study it and answer the questions which follow.**



**(a) Name the parts labelled K and V.**



(i) K \_\_\_\_\_

(ii) V \_\_\_\_\_

(b) What food value do we get from eating fish?

(c) Name the habitat for the above animal.

51. (a) Write any two examples of common cereals grown in Uganda.

(i) \_\_\_\_\_

(ii) \_\_\_\_\_

(b) Which food value do we get from eating the above crops?

(c) Give the use of the above food value to the human body.

52. Belo is a structure of a leaf.



(a) Name the parts labelled A and B

(i) A \_\_\_\_\_ (ii) B \_\_\_\_\_

(b) Identify the type of leaf venation shown in the above drawn leaf.

(c) How are leaves important to a plant?

53. (a) Name the three types of soil.

(i) \_\_\_\_\_

(ii) \_\_\_\_\_

(iii) \_\_\_\_\_

(b) Why is loam soil the best for crop growing?

54. (a) State any three reasons why we give first aid to casualties.

- (i) \_\_\_\_\_
- (ii) \_\_\_\_\_
- (iii) \_\_\_\_\_


**(b) Give the use of cotton wool to a first aider.**

55. **(a) Give any one cause of dehydration.**

**(b) Write any two signs of a dehydrated person.**

- (i) \_\_\_\_\_
- (ii) \_\_\_\_\_

**(c) Give any one proper way of treating a dehydrated person.**





**1<sup>st</sup> Term 2023 Holiday-Package**

**P.5 SOCIAL STUDIES & RELIGIOUS EDUCATION**

NAME \_\_\_\_\_ Stream \_\_\_\_\_

**SECTION A**

1. Name the element of a map which helps to calculate actual ground distance between places.

\_\_\_\_\_

2. Why do we keep goats at our homes?

\_\_\_\_\_

3. Mention one use of a museum to a country like Uganda.

\_\_\_\_\_

4. Suggest any one way we can control soil erosion in hilly areas.

\_\_\_\_\_

5. What are physical features?

\_\_\_\_\_

6. Write one use of a drum in our community.

\_\_\_\_\_

7. Identify any one value of forests to man.

\_\_\_\_\_

8. Name the clouds which give us rain.

\_\_\_\_\_

9. What was the general name of the three sons of Kintu?

\_\_\_\_\_

10. Give one section under the police.

\_\_\_\_\_

11. How is a bank useful to people in the community?

\_\_\_\_\_

12. How many members make up the local council 1 executive committee?  
\_\_\_\_\_
13. Draw a map symbol for a dam  
\_\_\_\_\_
14. Which colour of the Uganda flag represents brotherhood?  
\_\_\_\_\_
15. Give one example of a nontraditional cash crop.  
\_\_\_\_\_
16. In which way was a dog useful to early man?  
\_\_\_\_\_
17. Write down one responsibility of a child in a home.  
\_\_\_\_\_
18. Identify one way a farmer cares for his/her crops.  
\_\_\_\_\_
19. Write U.P.E in full.  
\_\_\_\_\_
20. What is a homestead?  
\_\_\_\_\_
21. State one way in which a school benefits from a nearby forest.  
\_\_\_\_\_
22. What type of weather makes our roads dusty?  
\_\_\_\_\_
23. Why do we need leaders in our community?  
\_\_\_\_\_
24. Which country neighbors Uganda in the east?  
\_\_\_\_\_
25. Name any one delicate weather instrument that you know.  
\_\_\_\_\_
26. Who heads a school?  
\_\_\_\_\_

27. Name any one volcanic mountain in Uganda.

---

28. What type of wood do we get from natural forests?

---

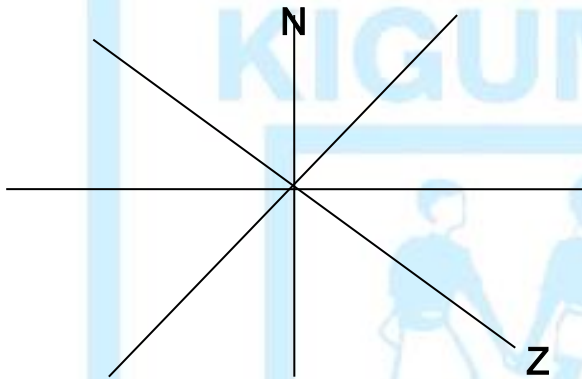
29. Why do school children wear school uniforms?

---

30. Mention one use of swamps to man.

---

31. Name the points of a compass direction shown below with letter Z.



32. Give one example of a craft made out of banana fibres.

---

33. What is child abuse?

---

---

34. Why do farmers harvest crops during the dry season?

---

35. How many countries does Uganda share borders with?

---

**FOR QUESTIONS 36 - 40, ANSWER EITHER CHRISTIANITY OR ISLAM BUT NOT BOTH IN THE SAME NUMBER**

36. Either: Who was the mother of Jesus Christ?

---

OR Who was the mother of prophet Muhammed?

---

37. Either: In which city was Jesus Christ born?

---

OR: In which city was prophet Muhammed born?

---

38. Either: What did God create Last?

---

OR What did Allah create last?

---

39. Either: Why do Christians fast?

---

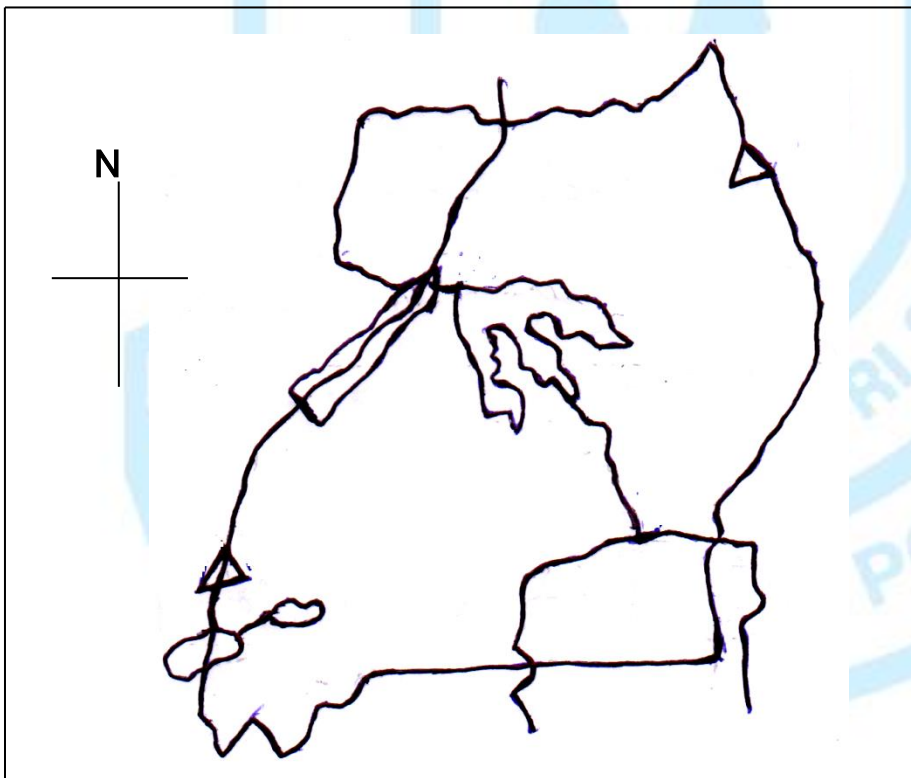
OR Why do Muslims fast?

---

40. FOR BOTH : Give one way people show respect to God.

---

**STUDY THE SKETCH MAP OF UGANDA BELOW AND USE IT TO ANSWER QUESTIONS THAT FOLLOW**



41a) Name Uganda's neighbors marked with letters K and M

i) K \_\_\_\_\_

ii) M \_\_\_\_\_

b) Name the physical features marked with letters A and B

i) A \_\_\_\_\_

ii) B \_\_\_\_\_

42a) Mention two basic needs of a family.

i) \_\_\_\_\_

ii) \_\_\_\_\_

b) Identify any two reasons why some families lack basic needs

i) \_\_\_\_\_

ii) \_\_\_\_\_

43a) Write one product got from the following materials

a) cotton : \_\_\_\_\_

b) Milk: \_\_\_\_\_

c) sisal : \_\_\_\_\_

d) sugarcane: \_\_\_\_\_

44a) State any two rights of children in our community

i) \_\_\_\_\_

ii) \_\_\_\_\_

b) Mention two ways in which children's rights are abused.


i) \_\_\_\_\_

ii) \_\_\_\_\_

45a) What is a map?

\_\_\_\_\_

b) Name the element of a map below.



c) How did people of long ago tell the direction of places?

i) \_\_\_\_\_

ii) \_\_\_\_\_

46a) What is migration?

\_\_\_\_\_

\_\_\_\_\_

b) Define rural - urban migration.

\_\_\_\_\_

c) State two reasons why people migrate from villages to towns.

i) \_\_\_\_\_

ii) \_\_\_\_\_

47. Complete the table below

Country	Capital city
_____	Bujumbura
South Sudan	_____
_____	Nairobi
_____	Dodoma

48a) What is Urban rural migration?

\_\_\_\_\_  
\_\_\_\_\_

b) State three ways in which the government of Uganda can control rural-urban migration.

i) \_\_\_\_\_

ii) \_\_\_\_\_

iii) \_\_\_\_\_

49a) What is communication?

\_\_\_\_\_  
\_\_\_\_\_

b) State any two modern means of communication.

i) \_\_\_\_\_

ii) \_\_\_\_\_

c) Why are there few people in Uganda who use mobile phones?

\_\_\_\_\_



50a) Write the following in full

i) DEO : \_\_\_\_\_

ii) USE: \_\_\_\_\_

iii) SCH: \_\_\_\_\_

iv) LC: \_\_\_\_\_

**FOR QUESTIONS 51-55 ANSWER EITHER CHRISTIANITY OR ISLAM BUT NOT BOTH**

Either :51a) Name any four of Jesus' apostles

i) \_\_\_\_\_ ii) \_\_\_\_\_

iii) \_\_\_\_\_ iv) \_\_\_\_\_

OR. b) Name any four prophets of Allah.

i) \_\_\_\_\_ ii) \_\_\_\_\_

iii) \_\_\_\_\_ iv) \_\_\_\_\_

Either: 52a) Identify any two groups of people who need to be prayed for

i) \_\_\_\_\_ ii) \_\_\_\_\_

b) State one way in which a prayer is important to Christians.

\_\_\_\_\_

OR a) Identify two groups of people who need to be prayed for

i) \_\_\_\_\_ ii) \_\_\_\_\_

b) Which special place do Muslims go for prayers?

\_\_\_\_\_

Either 53) What do the following names mean?

a) Moses \_\_\_\_\_

b) Emmanuel \_\_\_\_\_

c) Peter \_\_\_\_\_

d) Genesis \_\_\_\_\_

OR What do the following names mean in Islam

a) Kaaba \_\_\_\_\_

b) Hijja \_\_\_\_\_

c) Quran \_\_\_\_\_

d) Kibra \_\_\_\_\_

Either 54a) What is Faith?

\_\_\_\_\_

\_\_\_\_\_

b) Identify some three people of great faith in the Bible.

i) \_\_\_\_\_

ii) \_\_\_\_\_

iii) \_\_\_\_\_

OR Mention any four prophets in Islam.

i) \_\_\_\_\_

ii) \_\_\_\_\_

iii) \_\_\_\_\_

iv) \_\_\_\_\_

b) State three ways in which the government of Uganda can control rural- urban migration.

i) \_\_\_\_\_

ii) \_\_\_\_\_

iii) \_\_\_\_\_

55. FOR BOTH

Mention four qualities of a good leader

i) \_\_\_\_\_

ii) \_\_\_\_\_

iii) \_\_\_\_\_

iv) \_\_\_\_\_

*“Fathers, do not embitter your children, or they will become discouraged.”*

**Colossians 3:21**