



**1<sup>st</sup> TERM 2023 Holiday-Package**  
**ENGLISH P.4**

Name -----Stream:---

**SECTION A**

Fill in with a suitable word.

1. -----old are you?
2. He is as busy -----a bee.
3. John -----Tom are brothers.
4. I prefer bread -----cakes
5. She is eating -----orange

Use the correct form of the words given in brackets to complete the sentences.

6. James is ----- his clothes now. (wash)
7. I saw three -----on the tree. (monkey)
8. The doctor ----- to London yesterday. (go)
9. We did the work very ----- (quick)
10. Our ----- is very kind. (teach)
11. We go out of the classrooms ----- a day. (one)
12. Mary is ----- than Jane. (short)
13. I was the ----- in midterm exams. (two)
14. He is the -----boy in our class.(smart)
15. A rabbit ----- in a hutch. (live)

Arrange the words in alphabetical order.

16. stool, pot, cat, mat

-----

17. packet, pan, pad, park

-----

18. carrot, cane, catch, came

-----  
**Give the plural of the underlined word.**

19. The orange was in the basket.

-----  
20. He saw a mouse running.

-----  
21. They greeted the chief.

-----  
**Rearrange these words to make correct sentences.**

22. eating apple is Richard an.

-----  
23. crying are why you?

-----  
24. new she set bought a.

-----  
**Write the abbreviations in full.**

25. Wed ----- 26. I'm -----

-----  
**Re- write giving the opposite of the underlined word.**

27. This house is very clean.

-----  
28. My sister is a teacher.

-----  
**Construct a sentence using these words.**

29. cut: -----

30. cat: -----

-----  
**Re-write the sentences as instructed in the brackets.**

31. Rose did not come to school. She was ill. (Use ----- because-----)

-----  
32. The teacher caned me. I did not cry. (Use ----- but.....)

33. Tom didn't go to school yesterday. Peter didn't go to school yesterday.  
(Use -----and -----)  
-----  
-----
34. That is the dog. It bit a boy yesterday. (Use .....which .....)  
-----
35. Does it rain daily? (Give a correct response for the above question)  
-----
36. Wasswa likes oranges. He likes apples very much. (Use ----- more than -----)  
-----  
-----
37. I was an elephant. I did not run. (Begin: Although -----)  
-----
38. The girl swept the class. The girl is at home. ( Use -----who -----)  
-----
39. We were doing the work. The bell rang. (Use -----when-----)  
-----
40. where has agnes gone. (Punctuate the sentence correctly)  
-----
41. Robert is proud. A peacock is proud. (Use -----as -----as -----)  
-----
42. I like dancing more than singing. (use -----prefer -----to -----)  
-----
43. Musoke is kind. Mubiru is kind. (Begin: Both -----)  
-----
44. As blind as ----- (complete correctly)  
-----
45. That is the boy. His father is a farmer. (Use -----whose -----)  
-----
46. I got a gift. I won the race. (Use because-----)  
-----
47. There isn't any sugar in this tin. (Use-----some -----)  
-----

-----  
48. Jams is my friend. (Begin: Is -----?)  
-----

49. Winnie went to the place where books are kept. (Give one word for the underlined group of words)  
-----

50. A cat is a dangerous animal. A dog is a dangerous animal. (Begin: Both----)  
-----  
-----

### **SECTION B**

Read the passage below and answer questions about it in full sentences.

My name is Peter. I am in Primary Three class at Bwenajjo Primary School. My friend Ronald is in primary four class at the same school. Both of us are working hard to join the next class.

Last Monday my friend and I went to market to buy apples, mangoes, pawpaw and oranges. Mr. Munulo, my class teacher, sent us to do so. At the market, we saw a chief beaten to death; he had stolen shoes from one of the sellers. He was rescued by the policeman and he was taken to prison. We went back to school very afraid.

#### Questions

1. In which class is Peter?  
-----  
-----

2. Where does peter go to school?  
-----  
-----

3. Who is Peter's friend?  
-----

-----  
4. In which class is Peter's friend?  
-----  
-----

5. When did the two boys go to the market?  
-----  
-----

6. What did they buy from the market?  
-----  
-----

7. Who is the class teacher of primary three?  
-----  
-----

8. What did the boys see at the market?  
-----  
-----

9. Who rescue the thief?  
-----  
-----

10. Where was the thief taken?  
-----

**Rearrange the sentences to make a meaningful story.**

- a) I want two kilograms of sugar.
- b) One day, Mrs. Wasike sent John to the shop.
- c) Good morning John.
- d) She gave him some money and the shopping bag.
- e) John got on his bicycle.
- f) When he reached the shop, he greeted the shopkeeper.
- g) He rode very fast.
- h) Good morning sir.
- i) The shopkeeper gave him sugar and rode back home



j) Mrs. Wasike was very happy to see John back home.

-----  
-----  
-----  
-----  
-----  
-----  
-----  
-----  
-----  
-----  
-----  
-----  
-----  
-----  
-----  
-----  
-----  
-----  
-----  
-----  
-----  
-----

53. The table below shows marks scored by some P.3 pupils in an English test study it carefully and answer questions about it in full sentences.

Pupils	Lwanga	Mark	Rose	Alex	Sarah	Kato	Nakya
marks	82	70	99	85	95	90	75

**Questions**

- a) What is the table about?  
-----
- b) How many pupils sat for the test?  
-----
- c) For which subject are the above shown marks?  
-----

d) How many girls sat for the test?

-----

e) Who scored the highest marks?

-----

f) What was the lowest mark scored?

-----

g) Which pupil scored the least mark?

-----

h) Which class sat for this test?

-----

i) What was the highest mark scored?

-----

j) How many boys sat for the above test?

-----

**Read the conversation below and answer questions about it in full sentences.**

John: Good afternoon Mr. Lukoda.

Mr. Lukoda: Good afternoon John. What is your problem?

John: My friend Musa was bitten by a snake.

Mr. Lukoda: A snake! Where is he now?

John: He is in the dispensary and the nurse are requesting for his parents' contact

Mr. Lukoda: Oh no! I have left the book home but let me go for it

John: Thank you sir.

Mr. Lukoda: You are welcome.

**Questions**

i) Who are the people conversing?

-----

-----

ii) At what time of the day did they meet?

-----  
-----  
iii) How many people are conversing?

-----  
-----

iv) Who is John's friend?

-----  
-----

v) What is the problem with Musa?

-----  
-----

vi) Who was bitten by a snake?

-----  
-----

vii) Where was Musa at that time?

-----  
-----

viii) Did John get help from Mr. Lukoda?

-----  
-----

ix) Who wanted the parents of Musa's contact?

-----  
-----

x) Why did the nurses want that contact?

-----  
-----

xi) Give a suitable title to the above conversation.

-----  
-----

55. Use the words below to complete the story.



Mosquito nets, hands, diseases, vectors, houseflies, malaria, insect, mosquitoes, food, latrines, soap

There are many ----- which spread ----- . These insects are called ----- . Some of the vectors ate ----- , ----- , tsetse flies and lice. The mosquito spread ----- . Malaria is one of the deadly diseases in our sub-county. We should sleep under ----- to avoid malaria.

The houseflies spread dysentery. We should sleep under ----- to avoid malaria.

The house flies spread dysentery. We should cover the ----- and ----- to prevent the spread of dysentery.

We should always wash was our ----- with ----- before touching food and after visiting the latrine. In that way we stay safe from many diseases

\*\*\*\*\*SUCCESS\*\*\*\*\*



1<sup>st</sup> Term 2023 Holiday-Package

P.4 MATHEMATICS

Time allowed: 2hours 30minutes

NAME: \_\_\_\_\_

STREAM: \_\_\_\_\_

INSTRUCTIONS:

1. Attempt all questions.
2. Read the questions carefully
3. Untidy work will lead to loss of marks.
4. All working and answers for both sections A and B must be shown in the space provided.

SECTION A

1. Add:  $9 + 1 =$

2. How do we call objects found in a set?

3. Multiply: 
$$\begin{array}{r} 31 \\ \times 4 \\ \hline \end{array}$$

4. What is the place value of 4 in 9406?

5. Add: 
$$\begin{array}{r} 34 \\ 99 \\ \hline \end{array}$$

6. Complete the multiplication.

$4 \times 3 =$  ○ ○ ○ ○

11. Write the unshaded fraction.



7. Write a number that comes before and after.

\_\_\_\_\_, 110, \_\_\_\_\_

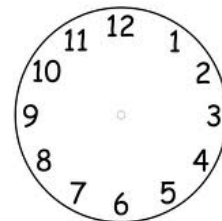
8. Write 4520 in words.

12. 1 kilogram of sugar costs shs. 3000. What is the cost of 2 kilograms?

9. Set  $H = \{3, 5, 7, 9\}$

Find  $n(H)$

13. Tell the time shown on the clock face.



10. If  stands for 5 balls how

many balls do  stand for?

14. Subtract:

$$\begin{array}{r} 796 \\ - 130 \\ \hline \end{array}$$



15. Count in threes.

\_\_\_\_\_

0, 3, 6, \_\_\_\_\_, \_\_\_\_\_, 15

16. Expand 715 using place values.

20. Mugisha had 250 goats. He sold 123 goats. How many goats remained?

17. Write equal set or equivalent set.

Set K = { 0, 2, 4, 6 }

Set L = { a, b, c, d }

Set K and set L are \_\_\_\_\_ sets.

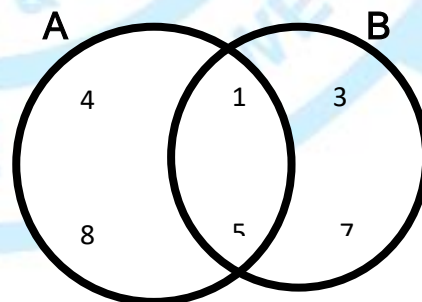
18. Add :

40 litres + 25 litres = \_\_\_\_\_

19. Name the set symbol below.

## SECTION B

21. Study the Venn diagram below and answer the questions.



a) How many members are in set A? (2 marks)

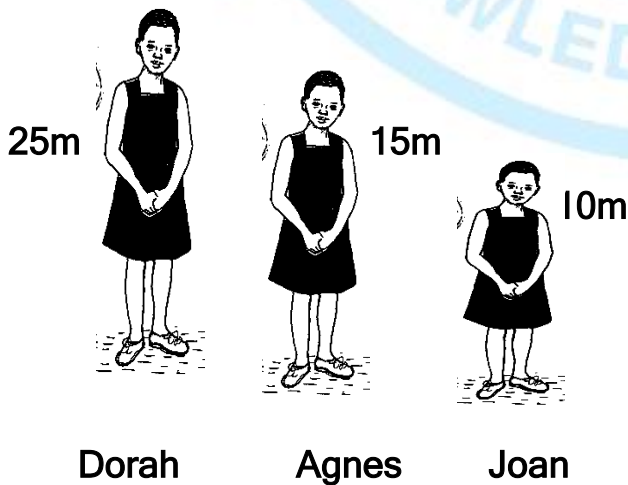
b) Find A n B (2 marks)

b) Who is the tallest girl? (1 mark)

c) Find n (B) (2 marks)

c) Find the total height of Dorah, Agnes, and Joan. (3 marks)

22. Below are the heights of different children.



a) Who is the shortest girl? (1 mark)

23. Add: 
$$\begin{array}{r} 7245 \\ + 353 \\ \hline \end{array}$$
 (2 marks)

b) Subtract: 
$$\begin{array}{r} 7986 \\ - 429 \\ \hline \end{array}$$
 (2 marks)

c) Multiply: 
$$\begin{array}{r} 333 \\ \times 3 \\ \hline \end{array}$$
 (2 marks)

d)  $8 \text{ \_\_\_\_\_\_ } 2 = 10$

24. Given the figure digits.

7, 5, 4, 9


a) Form the smallest 4 digits numerals. (1 mark)

26. Write in figures. "one hundred twenty five"

(2 marks)

b) Form the largest 4 digits numerals.

(1 mark)



c) Find the sum of the smallest and the largest numerals formed.

(2 marks)

b) What number has been expanded to give  $5000 + 300 + 40 + 6$ ?

(2 marks)

25. Fill in +, ÷, X, or - to complete correctly. (1 mark each)

a)  $4 \text{ \_\_\_\_\_\_ } 2 = 8$

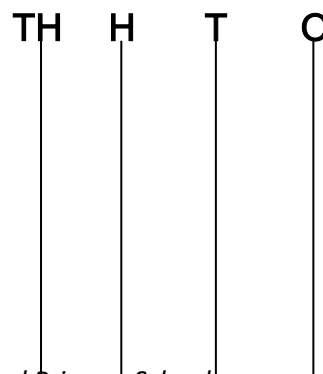
b)  $6 \text{ \_\_\_\_\_\_ } 3 = 2$

c)  $12 \text{ \_\_\_\_\_\_ } 7 = 5$

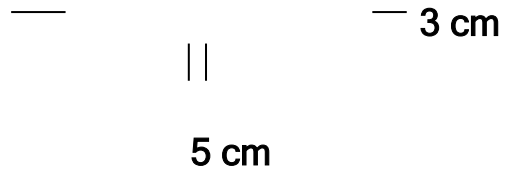
©2023

c) Show 3425 on the abacus.

(1 mark)







a) Find the value of  $m$  (1 mark)

27. Below is the price list. Use it to answer questions that follow.

- book costs shs. 1200
- A pen costs shs 400
- A pencil costs shs. 300

a) How much will I pay for a book and a pen?  
(2 marks)

b) Find the perimeter of the figure above.  
(2 marks)

c) Calculate the area.  
(2 marks)

b) What is the most expensive item?  
(1 mark)

d) Name the figure above.  
(1 mark)

c) Find the total cost of all the three items.  
(2 marks)

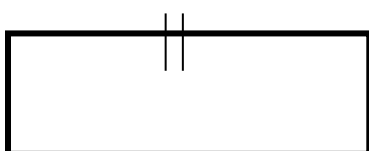
29. Work out. (2 marks each)

a)  $\square + 4 = 9$

b)  $\square - 6 = 10$

c)  $\square \times 4 = 8$

28. Use the figure below to answer the questions that follow.



30. Write the value of 7 in 37,625.

(2 marks)

31. Draw the following shapes in the space below. (1 mark each)

Rectangle	
Triangle	
Square	

b) Add the value of 6 and 5 in 37,625

(3 marks)

32. The table below shows the number of eggs sold by a farmer in a week.

DAYS	MON	TUE	WED	THUR	FRID
NUMBER OF EGGS	65	30	50	90	65

a) How many eggs were sold on Thursday?


(1 mark)

b) On which two days were the same number of eggs sold?

(1 mark)

c) On Which day was the least number of eggs sold? (1 mark)

d) Find the total number of eggs sold on Tuesday and Friday? (2 marks)






**1<sup>st</sup> Term 2023 Holiday-Package**  
**SCIENCE P.4**

**SCIENCE**

**NAME: ----- STREAM:-----**

1. Name the best type of soil for crop growing.  
-----
2. Mention any one main body part of an insect.  
-----
3. State one natural source of light.  
-----
4. Which clouds give us rainfall?  
-----
5. Which domestic animal gives us mutton?  
-----
6. What provides heat in the water cycle?  
-----
7. On a sugarcane , which part do we eat? -----
8. What are flowering plants?  
-----
9. In which season do farmers harvest their crops?  
-----
10. What is a germ? -----
11. What does a fish use for breathing? -----

12. In the space below, draw a garden tool used for watering crops.



13. What is leaf venation? -----  
-----

14. Suggest any one use of leaves to man.  
-----

15. Give one example of a fruit crop. -----

16. Which gas has the percentage of 78? -----

17. What is formed when dead plants and animals decay or rot?  
-----

18. Which gas is used to preserve drinks?  
-----

19. Identify one way of keeping our bodies clean.  
-----

20. What is a wet land? -----  
-----

21. What is weeding? -----  
-----

22. Mention any one childhood immunisable disease.  
-----

23. Give any one example of a non livingthing.  
-----

24. What is the best food for babies?

-----

25. Name one type of a family.

-----

26. Which disease is spread by a female anophelese mosquito?

-----

27. How do we call a young plant?

-----

28. Name one part that makes up the shoot system of a plant.

-----

29. Which animal guards our home?

-----

30. Mention the wild animal that gives us ivory.

-----

31. Suggest one method of preserving fish.

-----

32. How does a chameleon protect itself?

-----

33. Why do we boil water for drinking?

-----

34. Give one example of food rich in proteins.

-----

35. Which type of leaf is shown below?



-----



36. Name the clouds that appear as cotton piles in the sky.

-----

37. What does man use for feeling?

-----

38. What are man made changes?

-----

39. What is air?

-----

40. Name any one main body part of an insect.

-----

**SECTION B**

41a) What is wind?

-----

b) Identify any two uses of wind.

i) -----

ii) -----

c) State one danger of too much wind.

-----

42a) State two methods of planting crops.

i) -----

ii) -----

b) Identify two qualities of a good seed for planting.

i) -----

ii) -----

43a) State any two uses of swamps.

i) -----

ii) -----

b) Mention any one crop grown in a swamp.

-----

c) Identify one danger of swamps.

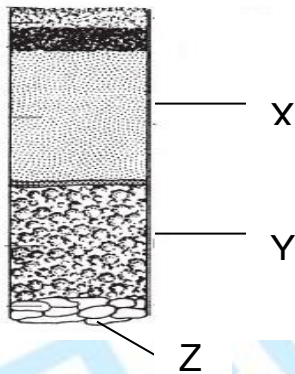
-----

44a) What is soil profile?

-----

-----

Study the diagram below and answer the questions that follow;



b) Name layers;

X -----

Y -----

c) Which layer is best for plant growth?

-----

45a) Match the following;

**A**

Fish

Man

Spider

Housefly

**B**

gills

lungbooks

spiracles

lungs

i) Fish -----

ii) Man -----

iii) Spider -----

iv) Housefly -----

46a). Give any two examples of animals that feed on flesh.

i) ----- ii) -----

b) Give any two examples of animals that feed on grass.

i) ----- ii) -----

47a) What is food? -----  
-----

b) Give two classes of food.

i) ----- ii) -----

c) To which class of food does posho belong?  
-----

48a) Where does the sun rise from?  
-----

b) Where does the sunset?  
-----

c) Give any two uses of the sun to man.

i) -----

ii) -----

49a) What are primary roots? -----  
-----

b) Give any two examples of primary roots.

i) ----- ii) -----

c) Which primary roots are found on a bean plant?  
-----

50a) What is transplanting? -----  
-----

b) Which garden tool do we use for transplanting?

-----

c) Mention two crops that are commonly transplanted.

i) ----- ii) -----

51a) What are crop growing practices? -----

-----

b) State any three crop growing practices.

i) ----- ii) -----

iii) -----

52a) Draw these items we use for cleaning our bodies.

Soap	Sponge	Comb	Toothbrush

53a) Mention the two main groups of living things.

i) ----- ii) -----

b) Identify any two characteristics of living things.

i) ----- ii) -----

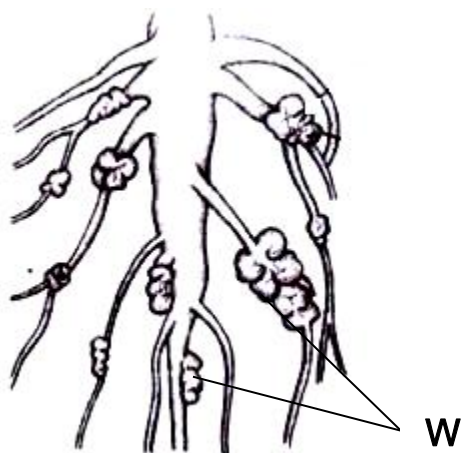
54a) What is energy? -----

-----

b) Identify any two sources of heat energy.

- i) ----- ii) -----  
c) State the main natural source of heat and light energy.

-----  
Study the diagram below and answer the questions that follow.



55a) Which group of crops has such roots?  
-----

b) Name part labelled W.  
-----

c) What is stored in part W?  
-----

d) Mention any one crop with such roots.  
-----



# 1<sup>st</sup> Term 2023 Holiday-Package

## SOCIAL STUDIES

### SECTION A

NAME: ----- STREAM: -----

1. State the work of a doctor in your district.  
-----
2. In which region of Uganda is Wakiso district.  
-----
3. Who heads a school? -----  
-----
4. Name the basic need we get from the garden.  
-----
5. Name the district where your school is located.  
-----
6. Name the product made out of clay.  
-----
7. What is another name of a swamp?  
-----
8. Name one right of a child.  
-----
9. Why should a farmer keep cows?  
-----
10. Give one means of road transport.  
-----



11. Name one natural source of light.  
-----
12. What basic need do we get from the garden?  
-----
13. Under which type of weather do we use umbrella?  
-----
14. Name the biggest lake in Uganda.  
-----
15. What special name is given to the father of twins in Buganda.  
-----
16. What is the opposite of west.  
-----
17. How do we call a low land between two hills?  
-----
18. Write local council in short.  
-----
19. Where does the compass point when its at rest?  
-----
20. Name the county where our school is located.  
-----
21. Name the mother district of Wakiso.  
-----
22. Why do we plant trees around the school compound?  
-----
23. How is a dog useful to people? -----  
-----
24. Write U.P.E in full. -----  
-----

25. Mention one crop that grows well in wetlands.

-----

26. Give one social service government provides people in our district.

-----

27. Where does the sun set from.

-----

28. Mention one physical feature found in our district.

-----

29. Draw a map of a tree in the space provided.

30. Which traffic lights tell drivers to go?

-----

**FOR QUESTIONS 31-40, ANSWER EITHER FOR CHRISTIANS, OR FOR MUSLIMS BUT NOT BOTH**

31. Either: Name the place where Christians go for prayers

-----

Or: Name the place where Muslims go for prayers.

-----

32. Either: Name one religious leader.

-----

Or: Name one Muslim religious leader.

-----

33. Either: Why do Christians go to church?

-----  
Or: Why do Muslims go to the mosque?  
-----

34. Either: How many days do Christians fast?  
-----

Or: How many days do Muslims fast?  
-----

35. Either: Write in full C.R.E  
-----

Or: Write in full I.R.E  
-----

36. Either: What is lent?  
-----

Or: What is saum?  
-----

37. Either: Who baptized Jesus?  
-----

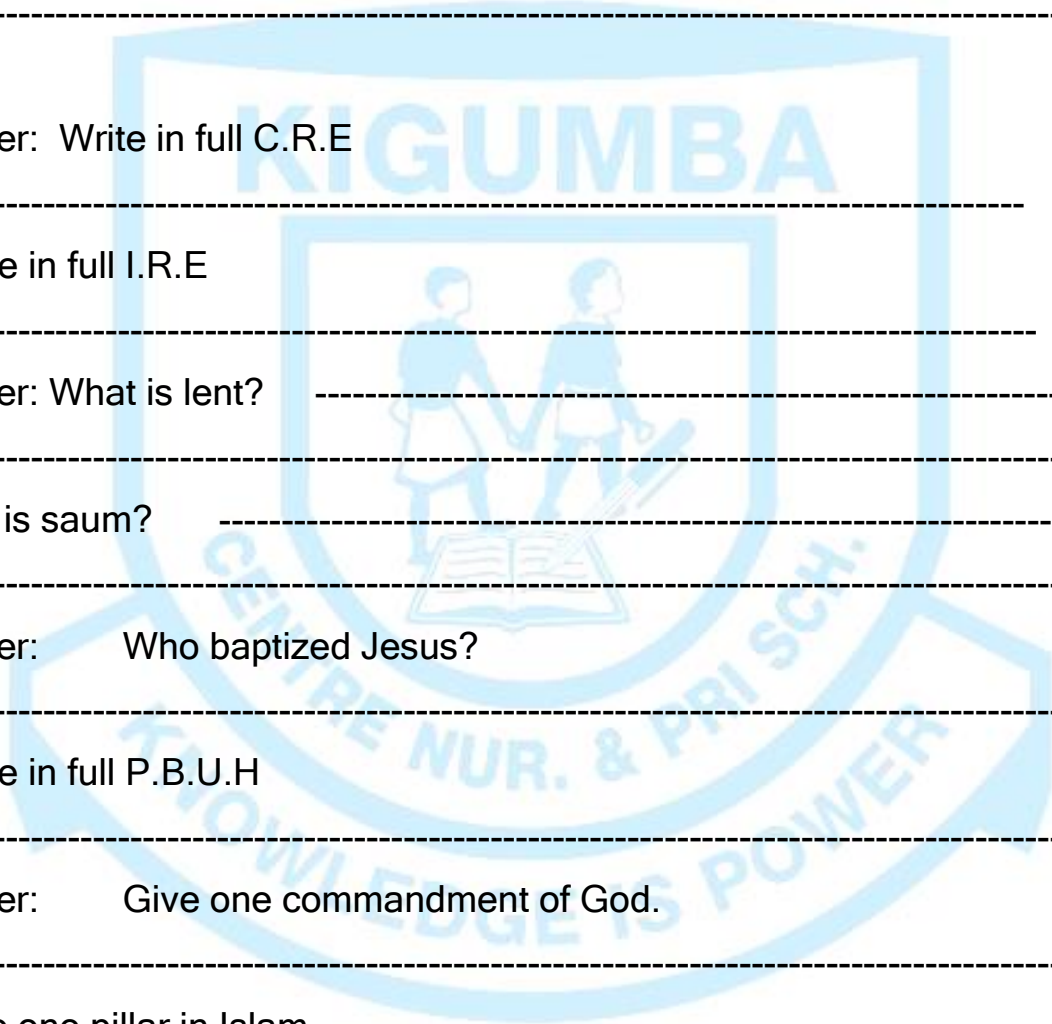
Or: Write in full P.B.U.H  
-----

38. Either: Give one commandment of God.  
-----

Or: Give one pillar in Islam.  
-----

39. Either: Who created Christians?  
-----

Or: Who created the Muslims?  
-----



40. Either: Name the first man to be created by God.

-----

Or: Who was the founder of Islam.

-----

### **SECTION B**

41a) What is a compass?

-----

b) Write down any three semi-cardinal points on a compass.

i) ----- ii) ----- iii) -----

42. Draw the map symbols shown in the table below.

	Item	Map
a	House	
b	Table	
c	Cup	
d	Pot	

--	--	--

43a) What are physical features?

-----

b) Give three examples of physical features.

i) ----- ii) -----

iii) -----

44a) What are domestic animals? -----

-----

b) Write the meat to these animals.

i) Cow -----

ii) Sheep -----

iii) Pig -----

45. What are the raw materials used to make the following;

a) Cloth -----

b) Cigarrets -----

c) Sugar -----

d) Coffee beverage -----

46. Outline any four symbols of a school.

i) ----- ii) -----

iii) ----- iv) -----

47. Write down the languages used by the people below.

a) Baganda -----

b) Basoga -----

c) Banyankole -----

d) Batooro -----

48a) What is environment? -----  
-----

b) Write down any three natural components of the environment.

i) ----- (ii)-----

iii) -----

49a) What are drainage features. -----  
-----

b) Mention any three examples of drainage features you know.

i) ----- (ii)-----

iii) -----

50. What is a mountain? -----  
-----

b) Give two examples of mountains in Uganda.

i) ----- ii)-----

c) Give one problem facing people living around mountains.  
-----

**FOR QUESTIONS 51-55, ANSWER EITHER *CHRITIANS* OR *MUSLIMS* BUT *NOT BOTH***

51a) EITHER:

a) How many days did God take to create the world.  
-----

b) Give three creatures which were created by God.

i) ----- ii)----- iii)-----

OR:

a) How many days did Allah take to create the world?  
-----



b) Name three creatures which were created by Allah.

i) ----- ii) ----- iii)-----

52a). Write down any four Christian names.

i) ----- ii) -----

iii) ----- iv) -----

OR:

Write down any four Islamic names

i) ----- ii) -----

iii) ----- iv) -----

53. Either.

Mention any four miracles performed by Jesus.

i) -----

ii) -----

iii) -----

iv) -----

OR:

Write down any four types of prayers for Muslims.

i) -----

ii) -----

iii) -----

iv) -----

54. Mention any four parables used by Jesus Christ.

i) -----

ii) -----

iii) -----

iv) -----

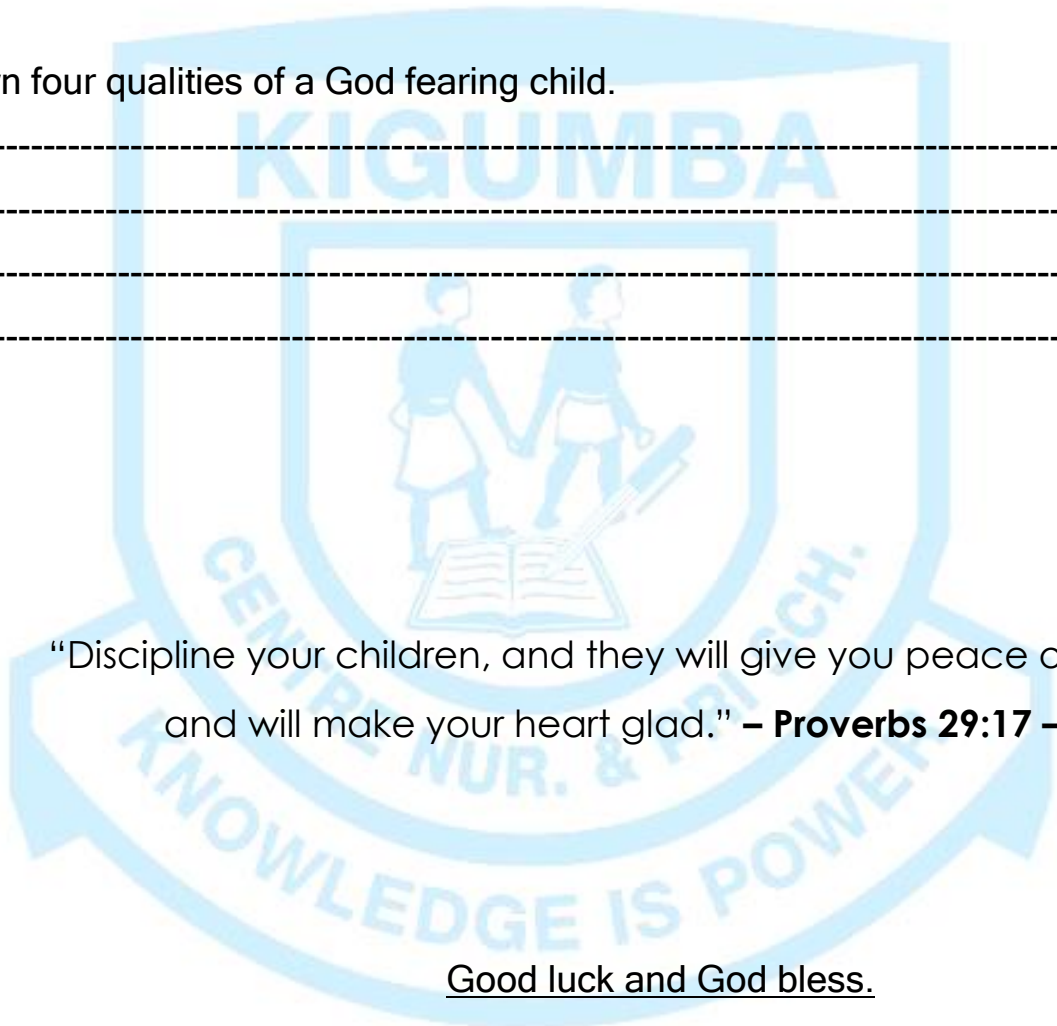
Or Write down four pillars of faith in Islam.

- i) \_\_\_\_\_
- ii) \_\_\_\_\_
- iii) \_\_\_\_\_
- iv) \_\_\_\_\_

**For Both**

Write down four qualities of a God fearing child.

- i) \_\_\_\_\_
- ii) \_\_\_\_\_
- iii) \_\_\_\_\_
- iv) \_\_\_\_\_



“Discipline your children, and they will give you peace of mind and will make your heart glad.” – **Proverbs 29:17** –

Good luck and God bless.