



**1<sup>st</sup> Term 2023 Holiday-Package**  
**ENGLISH P.3**

Name -----Stream: ----

Fill in the correct letter to complete the words given.

1. sh\_\_rt      2. r\_\_in      3. g\_\_od      4. dig\_\_ing      5. nor\_\_h

Arrange the following letters to make correct words.

6. oesmang -----  
7. indbeh -----  
8. quemos -----

Choose the correct word in the brackets to complete the sentence.

9. My ----- is very clever. (son, sun)  
10. The girls -----netball every morning. (play, pray)  
11. She has two -----at home. (gots, goats)

Fill in with a suitable word.

12. She is eating -----orange.  
13. Bring me -----glass of water.  
14. Bagagga is -----good girl.  
15. It is flying ----- the tree.  
16. They are sitting ----- their chairs.  
17. -----Nile is the longest river in Africa.

Use the correct form of the words in brackets to complete the sentences.

18. Lubwama is -----his clothes now. (wash)  
19. Maria ----- to school everyday. (go)  
20. Peter -----a letter to hi father yesterday. (write)  
21. Sarah is -----in her room now. (sleep)  
22. The boy ----- over the fence yesterday. (jump)  
23. The girls have ----- the exercise. (do)

**Re- arrange the following words in alphabetical order.**

24. near across infront close

-----

25. budge boil banana bench

-----

26. ink orange apple upper

-----

27. cow sheep goat dog

-----

**Find a small word from the big one.**

28. blackboard

-----

29. playing

-----

**Give the plural of the following words.**

30. baby

-----

31. sheep

-----

32. tooth

-----

33. church

-----

**Give the opposites of the underlined words.**

34. The classroom is dirty.

-----

35. The housefly is very big.

-----

36. Mutoni is a tall girl.

-----

37. She gave us cold milk.

-----

**Re-arrange the following words to form a correct sentence.**

38. smart boy That is very.

-----

39. in the cat The box is.

-----  
40. baby milk drinking The is.  
-----

Write the following abbreviation in full.

41. Sch ----- 42. Sat. -----

Circle the odd man out.

43. One, zoo, five, eight  
-----

44. Paul Peter Jane Patrick  
-----

45. spoon, chalk, duster, blackboard  
-----

Re-write the following sentences as instructed in the brackets.

46. The teacher beat me. I did not do his work. (Join using: ----- because -----)  
-----

47. I can wash clothes. I cannot iron them. (Join using: -----but -----)  
-----

48. Emorut is fat. Cabrib is fat. (Join using: -----and -----)  
-----

49. Flavia is bright. Benedict is bright. (Join using: Both -----)  
-----

50. Daniel is crying. (Rewrite using: ----not----)  
-----

## SECTION B

51a) Read the story below and answer the questions about it in full sentences.

My name is Kamukamu, my village is Kisubi and my sub-county is Katabi.

There are many good things in my sub county, we have the hospitals. Sick people get enough treatment. We have workshops. Here we buy furniture of different kinds.

We have good schools, good teachers and many fruits.

You need to come and tour around our subcounty. You will learn many interesting things.

1. Give a good title to the story.

-----

2. Who lives in Kisubi?

-----

3. What is the name of Kamukamu's subcounty.

-----

4. Why do you think they have a workshop?

-----

-----

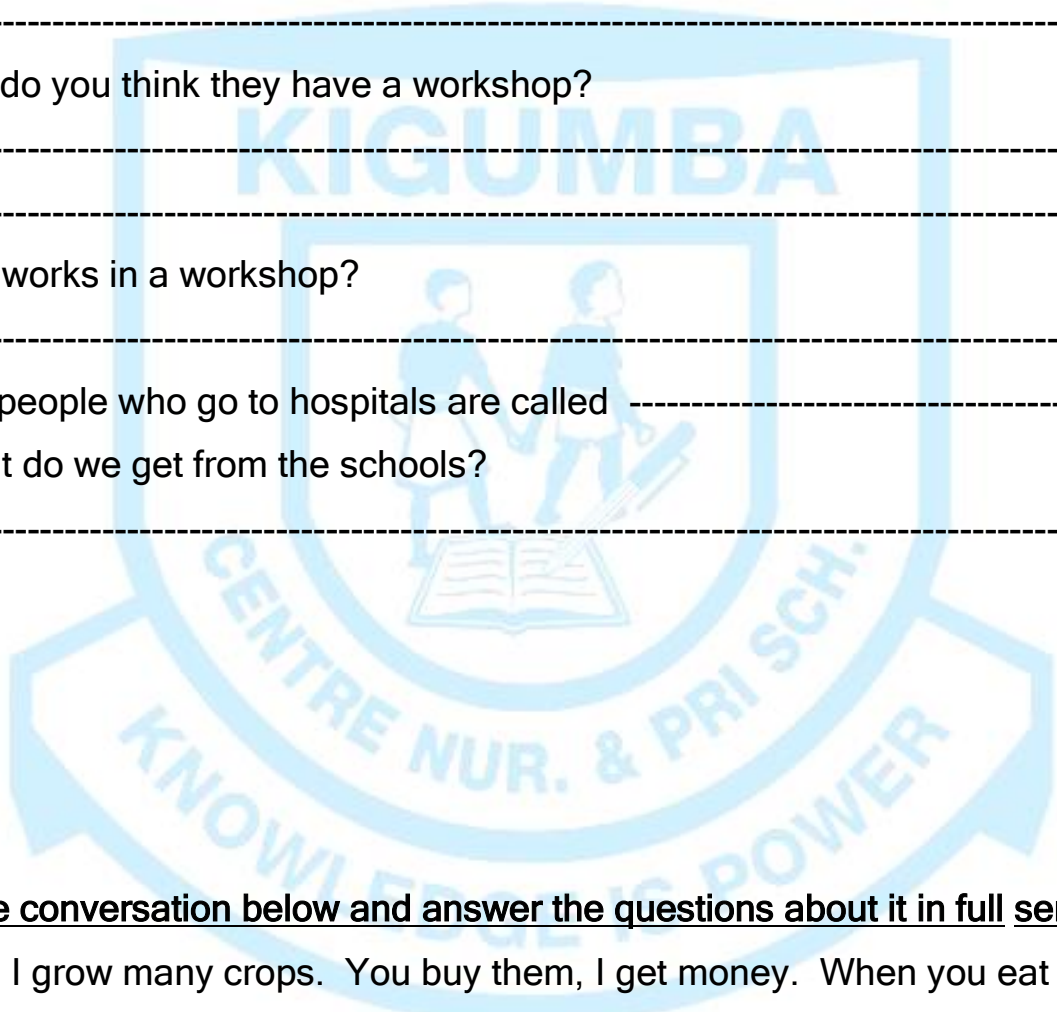
5. Who works in a workshop?

-----

6. Sick people who go to hospitals are called

7. What do we get from the schools?

-----



**b) Study the conversation below and answer the questions about it in full sentences.**

Farmer: I grow many crops. You buy them, I get money. When you eat my beans you get enough proteins to keep you growing.  
You cannot live without me.

Doctor: I am a doctor greater than you farmer, When you eat dirty fruits. You fall sick. When you eat uncovered food, you fall sick. I treat you when you are sick.  
Your lives depend on me.

Carpenter: Stop! Stop! Stop!, who makes those hoes you use in the garden?  
Who makes those wooden beds your sick people sleep on? What about  
the furniture in your office. I am the greatest of all.

Teacher: At all levels, from your baby class,  
I taught you how to use a toilet.  
In primary I taught you how to hold your pencil, pen and reading.  
Here you are ready to serve the nation.  
I teach all people including you the doctor, the carpenter and the farmer.  
We all need each other.

- i) Suggest a good heading for the conversation.  
-----
- ii) How many people are talking in the conversation?  
-----
3. Name one disease got from eating uncovered food.  
-----
4. What does a carpenter need to make furniture?  
-----
5. Do we need farmers?  
-----
6. Who treats sick people?  
-----
7. What do you learn from the conversation?  
-----

52a) Study the poem below and answer the questions about it in full sentences.

**PHYSICAL FEATURES**

Physical features, physical features,  
You are the natural land forms on earth  
We love touring you.

Touring lakes, rivers, mountains and valleys.

Oh our physical features

We cannot stop learning about you,

The forests give us timber, rain and firewood.

The lakes give us water, fish and sand.

We have strong houses because of your sand Mr. Lake.

By Kityo Paul.

### Questions

1. What is the heading of the poem?

-----

2. How many stanzas has the poem?

-----

3. Why do we need the Physical features?

-----

4. What food value is got from fish?

-----

5. Who wrote the poem?

-----

6. Which stanza is talking about forest?

-----

7. A person who makes strong houses is called a -----

52b) Study the rhyme below and answer the questions about it in full sentences.

I went to the zoo, I went to the zoo,

To see some animals with flowers on my hair.

Oh shake it, shake it, shake it, shake it until it falls down.

I heard pigs grant, snakes hissing, owls hooting,

some men were taking, monkeys laughing,  
the dogs barking and some bird singing.

By Nakalule Sylvia

**Questions**

1. Write a good title to the rhyme.

-----

2. How many parts has the rhyme?

-----

3. Who wrote the rhyme?

-----

4. Where did Nakalule go?

-----

5. What was on Nakalule's head?

-----

6. Which bird hoots?

-----

7. Where do dogs live?

-----

53a) **Re-arrange the sentences below to make a good story.**

1. She wants to see a doctor

2. Namuli is sick.

3. When the doctor came, she was treated.

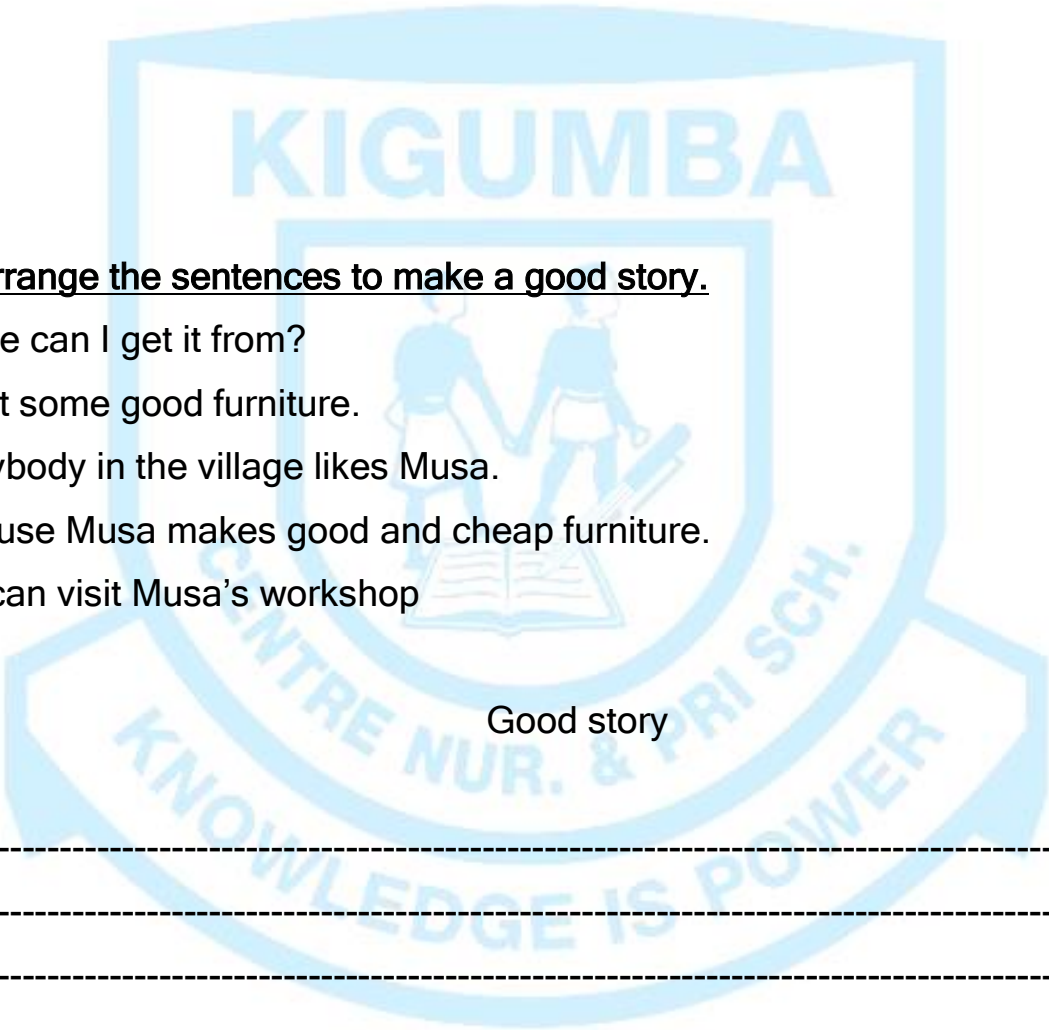
4. She waited for him to come

5. But the doctor was away.

Good story

-----

-----  
-----  
-----  
-----



53b) Re-arrange the sentences to make a good story.

1. Where can I get it from?
2. I want some good furniture.
3. Everybody in the village likes Musa.
4. Because Musa makes good and cheap furniture.
5. You can visit Musa's workshop

Good story

-----  
-----  
-----  
-----  
-----

54. Read the message below and answer the questions about it in full sentences.

To the primary three class.

You are reminded to ;

1. Respect peoples' work more so the prefects.
2. Pay attention to your teachers.
3. Line up while at the bursar's place.



4. Answer prayers at the assembly.

Those who will not follow the rules will;

1. Write apology letters.
2. Take their beds to the dining.
3. Meet their parents with the headmistress

By Matron Sylvia Mutoni

On 6<sup>th</sup> March, 2017

### Questions

1. To which class is the message?

-----

2. Who wrote the message?

-----

3. When was the message written?

-----

4. How many reminders were made?

-----

5. Why do we pay attention in class?

-----

6. What do the P.3 learn from the message

-----

55. Use the words below to complete the story

bricks, building, floor, sand, builder,  
carpenter

### BUILDING


We need many -----materials. The lake

gives us ----- . This sand makes our houses strong.

The -----supplies wood. This wood makes strong house roofs.

The ----- mixes sand and cement. From this he makes the ----- . Oh the brickmaker, his ----- start and finish the house.

---SUCCESS---





**1<sup>st</sup> Term 2023 Holiday-Package**  
**P.3 LITERACY I**

**NAME:** -----**STREAM:**----

1. What is the name of your town council?

-----

2. What is the name of your school?

-----

3. Who heads our school?

-----

4. Give any one town council found in Busiro municipality.

-----

5. In which district is our school found?

-----

6. What is a home?

-----

7. Give the name of our country?

-----

8. What are domestic animals?

-----

9. Give the village where our school is found.

-----

10. Give one way of cleaning a school.

-----

11. What name is given to a place where Christians go to worship?

-----

12. In the space below draw one important place.

13. Give one reason why we eat food.

-----  
-----

14. Draw and name one plant which gives us food.

15. How do we call a place where people keep their money safely?

-----

16. Name one place where we get food.

-----

17. Give one domestic animal which gives us milk.

-----

18. How do we call the representation of an object drawn as seen from above?

-----

19. Draw and name one thing made out of clay.

20. Give any one use of sand to people.

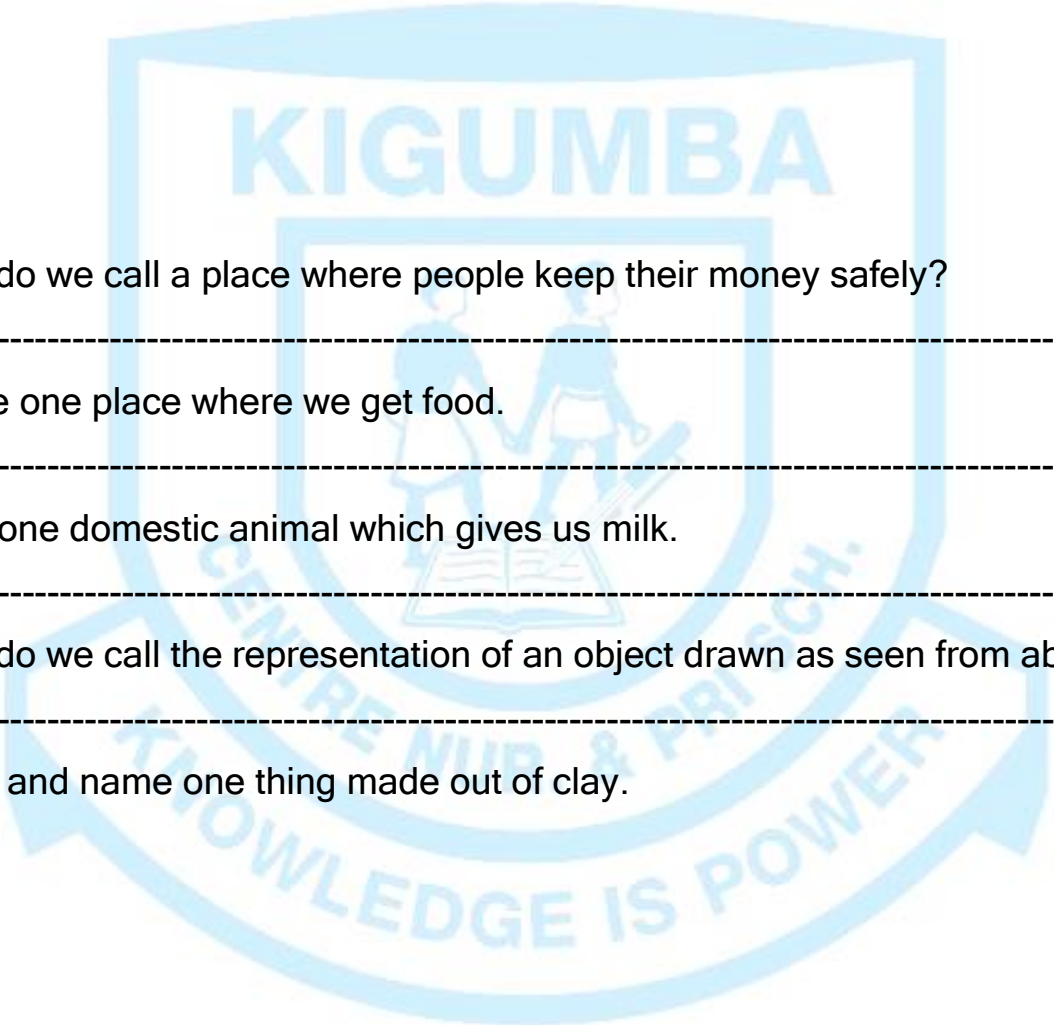
-----

21. Where does the sun rise?

-----

22. Identify any one example of a land mark in your town council.

-----



23. Give the quality of a good map which helps us to know what a map is about.

-----

24. Draw and name one building material.

25. How do we call a person who flies an aeroplane?

-----

26. Give one reason why a broom is important.

-----

27. Write any one thing money can be used to buy.

-----

28. Who is a child?

-----

29. Name any one group of people who disturb peace and security in a community.

-----

30. Name the president of Uganda.

-----

31. Name the king of Buganda.

-----

32. What is the capital city of Uganda?

-----

33. In the space below draw a picture of a cup.

34. Name one insect which bites us.

-----

35. Give one cause of road accidents.

-----

36. Name any one common accident at school.

-----

37. What is the quickest type of transport in Uganda?

-----

38. Draw and name one means of road transport.

-----

39. Name any one Television channel you know.

-----

40. How do we call a person who sails a ship?

-----

41. Draw the following things made out of local materials.

basket	Broom
ball	rope

42a) What is child abuse?

-----

-----

b) Give any three examples of child abuse practices.

i) -----

ii) -----

iii) -----

43. Name any four days of the week.

i) ----- ii) -----


iii) ----- iv) -----

44. Give any four types of weather.

i) ----- ii) -----

iii) ----- iv) -----

45. Draw the following domestic animals.

	
cow	goat
cat	dog

46. Name four things made out of milk.

i) ----- (ii) -----


iii) ----- (iv) -----

47. Draw and name four things made out of animal skins.


48a). How do we call an instrument used to show or find directions.

-----

b) Name the directions below;



a = -----

b = -----

c = -----

49. Give any four qualities of a good map.

i) -----

ii) -----

iii) -----

iv) -----

50. Name any four people who use a compass in their work.

i) ----- (ii) -----

iii) ----- (iv) -----

51. Draw and name four responsibilities of children at home.

--	--




52. Give any four basic needs of a family.

- i) ----- ii) -----  
 iii) ----- iv) -----

53. Copy and complete.

- a) The man who produce you is your -----  
 b) A son of your father or mother is your -----  
 c) A woman who produce your father or mother is your -----  
 d) A sister of your mother or father is your -----

54. Match the following;

- i) Lusoga                      Bakiga  
 ii) Luganda                     Batooro  
 iii) Lutooro                    Baganda  
 iv) Rukiga                      Basoga

- i) Rukiga                      -----  
 ii) Lutooro                     -----  
 iii) Luganda                    -----  
 iv) Lusoga                      -----


55a). Give two uses of trees in our school compound.

i) -----

ii) -----

b) Draw these items made from wood.

chair	bed





**Half Term 2020**  
**P.3 LITERACY II**

**NAME:** ----- **STREAM:** -----

**SECTION A**

1. Where does a fish live?  
-----
2. Name any one domestic animal.  
-----
3. Give any one immunisable disease.  
-----
4. Name any one animal used for transport.  
-----
5. What is the natural source of light?  
-----
6. Write one type of weather.  
-----
7. Name the young one of a dog.  
-----
8. Mention any one member of a nuclear family.  
-----
9. Mention one thing made from wood.  
-----
10. Write one activity you do at school.  
-----
11. How can we keep our house clean?  
-----
12. Who grows crops and keeps animals?  
-----

13. Draw and name one animal without legs.



14. What is an environment? .....

.....

15. Which type of soil is best for growing crops?  
.....

16. Why do we eat food? .....

.....

17. Which part of a plant holds it firmly in the soil?  
.....

18. Mention the place where clean utensils are kept at your home.  
.....

19. Name the utensil shown in the diagram below.



.....

20. Write down any one product got from animal skin.  
.....

21. What are domestic animals?  
.....

22. -----is formed when dead plants and animals decay or rot.

23. Give another word for environment.

-----  
24. Name any one item made out of clay soil.

-----  
25. Give any one way we can care for our body.

-----  
26. Mention any one animal which gives us meat.

-----  
27. Identify any one example of living things.

-----  
28. Name any one part of the body.

-----  
29. How many legs has a cow?

-----  
30. Why do we wash our hands after visiting the toilet?

-----  
31. Give any one dangerous insect.

-----  
32. How do we call the general cleanliness of our body and the things we use on it.

-----  
33. Give any one type of family.

-----  
34. Write any one type of transport.

-----  
35. Which animal guards our homes?

-----  
36. Name the insect which gives us honey.

-----  
37. Mention the part of sugarcane eaten by man.

-----  
38. State the type of soil used for building houses.

39. Give one reason why animals move. Name any one component of the environment.

-----

40. Name any one component of the environment.

-----

**SECTION B**

41a) What is soil?

-----

-----

b) Name any two components of soil.

i) ----- ii) -----

c) Give any one animal that lives in the soil.

i) -----

42a) Match the things we make in the following materials.

a) Sisal                                      clothes

b) Palm leaves                              ropes

c) Hides and skins                              mats

d) Cotton                                      shoes

Sisal                                      -----

Palm leaves                                      -----

Hides and skins                                      -----

Cotton                                      -----

43. Why do we give first aid? -----

-----

b) Give any three things in a first aid box.

i) ----- ii) -----

iii) -----

44a) Name any two things found in a classroom.

i) -----

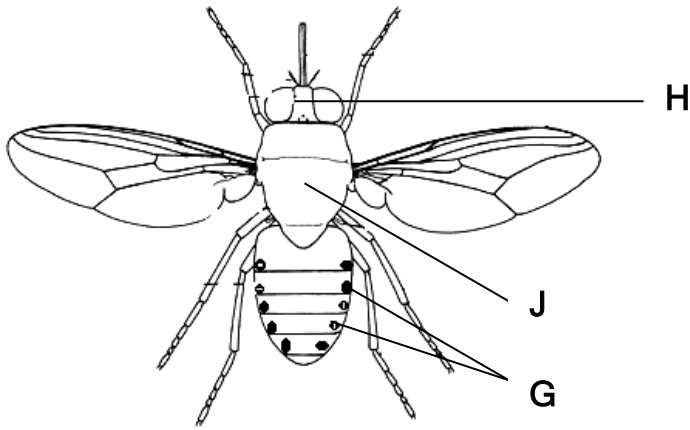
ii) -----

b) Give two ways how you can keep your classroom clean.

i) -----

ii) -----

45. The diagram below is of an insect use it to answer questions.



a) Name part marked;

- H -----
- J -----
- G -----

b) Name any one useful insect.

-----

46. What are wild animals? -----

-----

b) Mention any two examples of wild animals.

i) ----- ii) -----

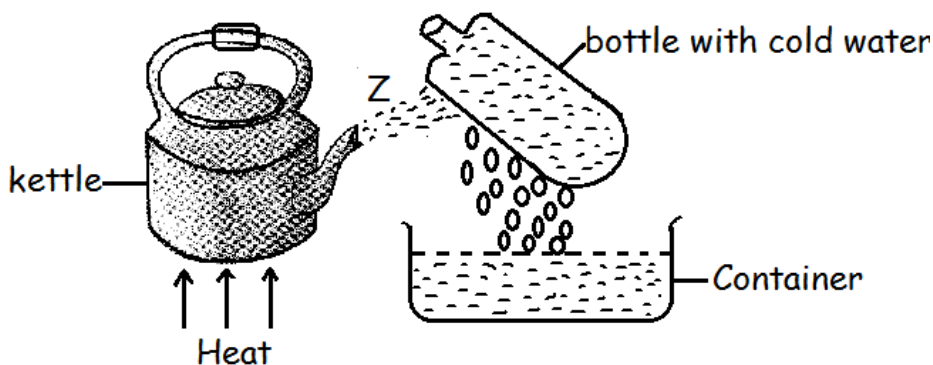
c) How do we call the young one of an elephant?

-----

47. Which sense organs do you use for;

- a) Hearing -----
- b) Smelling -----
- c) Tasting -----
- d) Feeling -----

48. P.3 class carried out an experiment. Use it to answer the questions that follow.



a) What do bubbles represent?

-----

b) Give any two uses of soil to people.

i) -----

ii) -----

c) How is air important in the soil? -----

-----49a)

Give two types of houses.

i) ----- ii) -----

b) Write down any two uses of houses.

i) -----

ii) -----

50a) Mention any two domestic birds.

i) ----- ii) -----

b) Write any two uses of domestic birds.

i) -----

ii) -----

51a) Name any two elements of weather.

i) -----

ii) -----

b) What is wind? -----

-----

c) Which cloud gives us rain? -----

52a) Draw these things we use to clean our body.

--	--	--	--



sponge	soap	water	towel
--------	------	-------	-------

53a) Name any two common foods in the community.

i) .....


ii) .....

b) Identify two places where we get food from.

ii) .....

ii) .....

54a) Name these garden tools.



.....

b) Give the uses of the following garden tools.

i) A hoe .....

ii) A Trowel .....

55a) Mention any two main parts of a plant.

i) .....

ii) .....

b) Give two uses of plants to people.

i) .....-ii)

.....



**Half Term 2020**  
**P.3 MATHEMATICS**


Name: .....Stream:.....

**SECTION A**

1. Work out:

$$\begin{array}{r} 10 \\ + 7 \\ \hline \end{array}$$

2. Name the set below.




3. Fill in correctly.

$$\begin{array}{|c|} \hline \text{3 circles} \\ \hline \end{array} + \begin{array}{|c|} \hline \text{2 circles} \\ \hline \end{array} + \begin{array}{|c|} \hline \text{2 circles} \\ \hline \end{array} = \begin{array}{|c|} \hline \phantom{\text{ }} \\ \hline \end{array}$$

$$\text{---} + \text{---} + \text{---} = \text{---}$$

4. Name the shape below.




5. Write 327 in words.

6. Subtract:  $\frac{6}{9} - \frac{4}{9} =$

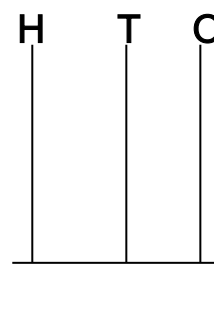
7. Naigaga had sh. 500. She bought a pencil at sh.200. How much money did she remain with?

8. Tell the time shown below.



9. One boy has 2 eyes. How many eyes will 6 boys have?

10. Show 543 on the abacus.



11. Multiply:  $\begin{array}{r} 31 \\ \times 3 \\ \hline \end{array}$

12. Fill in the blank space.  
5, 10, 15, \_\_\_\_\_, 25


13. Find the missing number.

$$\square - 4 = 7$$

14. Share 36 cups equally among 4 pupils. How many cups does each boy get?

15. A class has 25 girls and 47 boys. How many pupils are in that class?

16. Shade  $\frac{1}{3}$




17. Name the set symbol below.



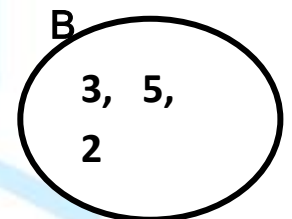
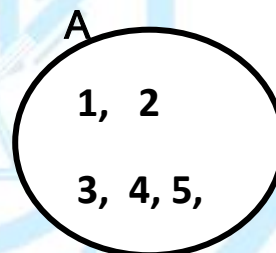
\_\_\_\_\_

18. Given the set below.



How many elements has set X?

19. Describe the sets below.



Set A and B are \_\_\_\_\_ sets.


20. What is the place value of 4 in the number 3450?

### SECTION B

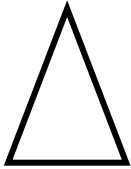
21. Which number comes;  
before 39 \_\_\_\_\_ (1 mark)

after 99 \_\_\_\_\_ (1 mark)

22. Name the shapes (6 marks)



\_\_\_\_\_



\_\_\_\_\_



\_\_\_\_\_

b) How many members has set L? (2 marks)

c) Which set has more members? (1 mark)

d) How many members are there in both sets? (1 mark)

23. Add: (2 marks)

$$\begin{array}{r} 3 \ 4 \\ 3 \ 5 \\ \hline \end{array}$$

$$\begin{array}{r} 6 \ 2 \\ 1 \ 9 \\ \hline \end{array}$$

$$\begin{array}{r} 1 \ 8 \\ 1 \ 2 \\ \hline \end{array}$$

25. Fill in the missing numbers. (8 marks)

(2 marks)

i)  $\square + 3 = 7$

(2 marks)

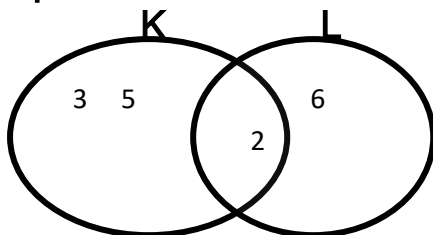
ii)  $\square - 2 = 6$

iii)  $\square \times 3 = 12$

b) A class has 435 boys and 366 girls. How many pupils are there altogether?

(2 marks)

24. Use the Venn diagram below and answer the following questions.



26. Expand the following numbers.

a) 24 (2 marks)

b) 432 (2 marks)

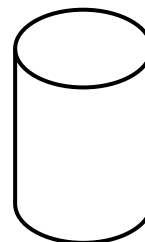
a) Find K n L (1 mark)

c) 156 (2 marks)

29. Compare using less or more.

27. Find the place value of the underlined figure.

a) 369 (2 marks)



a) A bansin holds \_\_\_\_\_ water than a tin. (1 mark)

b) A tin holds \_\_\_\_\_ water than a bansin (1 mark)

b) 203 (2 marks)

c) Subtract: 
$$\begin{array}{r} 38 \text{ kg} \\ 24 \text{ kg} \\ \hline \end{array}$$
 (2 marks)

c) 427 (2 marks)

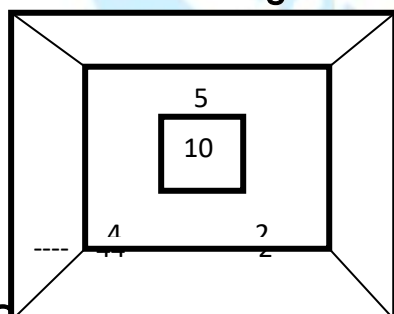
30. Tell the time shown below.

a)



(2 marks)

28. Fill in the missing numbers.



(6 marks)



It is \_\_\_\_\_ O'clock

b) It is 8 O'clock



(2 marks)

b) A half past 9 O'clock

(2 marks)



31. Work out:

a)  $\frac{1}{7} + \frac{3}{7} =$


(2 marks)

b)  $\frac{6}{18} + \frac{3}{18} =$

(2 marks)

c)  $\frac{4}{9} - \frac{1}{9} =$

(2 Marks)





**1<sup>st</sup> Term 2023 Holiday-Package**  
**P.3 RELIGIOUS EDUCATION**

NAME: ----- STREAM: -----

1. Who created you? -----
2. The first people to be created were ----- and -----
3. God created the ----- to give us light.
4. God created all things in ----- days.
5. God gave me a gift of two eyes for -----
6. Who is the son of God? -----
7. ----- Was born on Christmas day.
8. On Sunday Christians go to ----- to pray.
9. A ----- is a person who helps me in need. (friend, enemy)
10. Jesus had -----apostles.
11. Write down any one apostle of Jesus Christ. -----
12. Jesus was born in a town called -----  
(Kisubi, Bethlehem)
13. Jesus Christ was baptised in river----- . (Jordan, Nite)
14. How can you use water? I can use water for -----
15. Name one source of water. -----
16. Name the symbol drawn below;

-----

17. Give one role of a mother in a home.

-----

18. Name the holy book for Christians. -----


19. Moslems go for Juma prayers on -----.

20. Give one thing found in church.

-----

21. ----- is the mother of Jesus Christ.

22. My parents buy for me these things. Draw them.

	
basin	soap
sponge	apples



“All your children shall be taught by the Lord, and great shall be the peace  
of your children.” **Isaiah 54:13**

Good Luck and God Bless you.

